


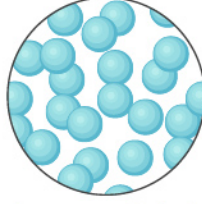
Tanecikleri Eşleştir

Maddeler mikroskobik düzeyde görebileceğimiz taneciklerden oluşur. Taneciklerin hareket şekilleri maddenin hangi halde olduğunu belirler.


Aşağıdaki madde taneciklerinin hangi maddelere ait olduğunu bulabilir misiniz?



1 - KATI



2 - SIVI



3 - GAZ



INEK ()



BUZ ()



BALON ()



SÜT ()



BULUT ()



ZEYTINYAĞI ()




ELMA ()



BUHAR ()

KAHVE ()



KEDİ ()

MASA ()